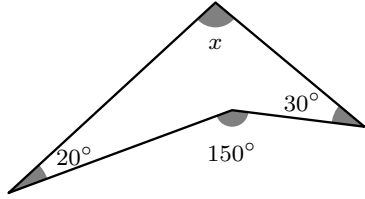


氏名

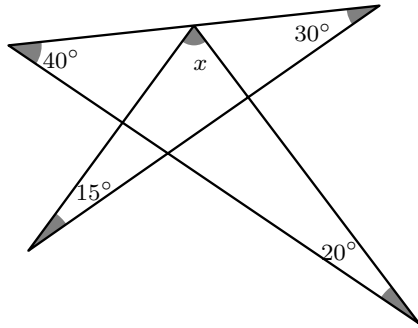
1 次の図で  $\angle x$  の大きさを求めなさい。

(1)



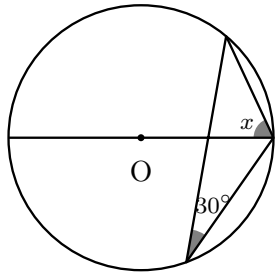
答え  $100^\circ$

(2)



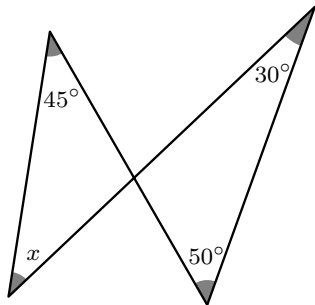
答え  $75^\circ$

(3)



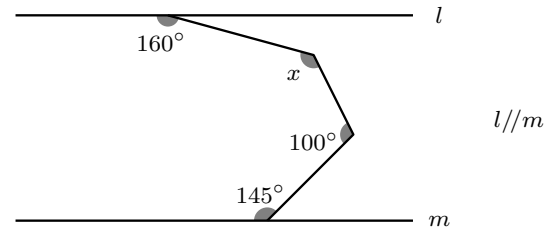
答え  $60^\circ$

(4)



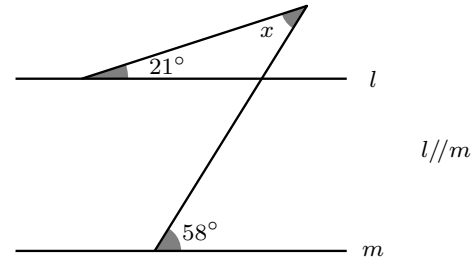
答え  $35^\circ$

(5)



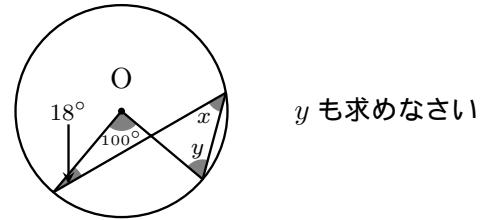
答え  $135^\circ$

(6)



答え  $37^\circ$

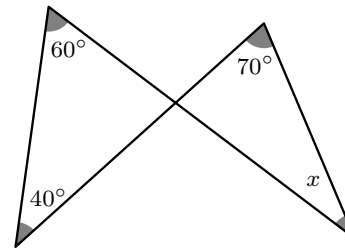
(7)



$y$  も求めなさい

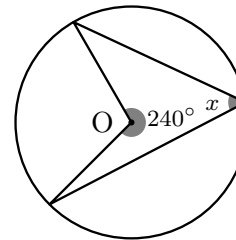
答え  $50^\circ, 68^\circ$

(8)



答え  $30^\circ$

(9)



答え  $60^\circ$