

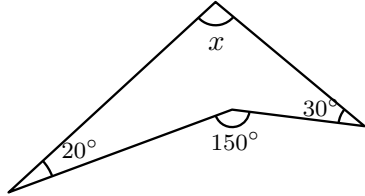
就職数学 授業プリント # 3

年 組 号

氏名

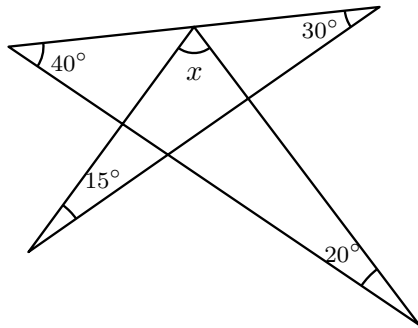
1 次の図で $\angle x$ の大きさを求めなさい。

(1)



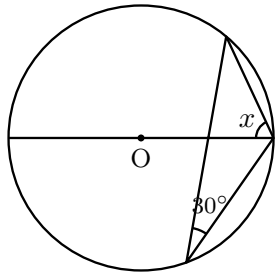
答え 100°

(2)



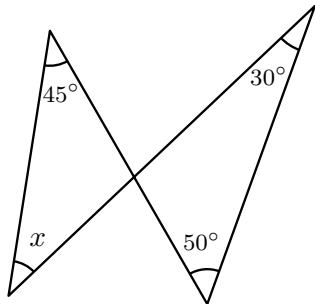
答え 75°

(3)



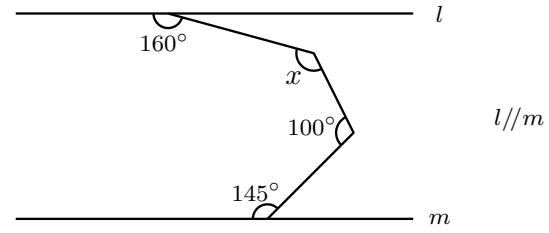
答え 60°

(4)



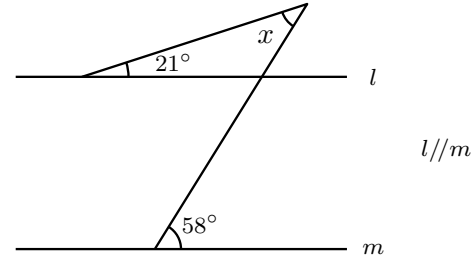
答え 35°

(5)



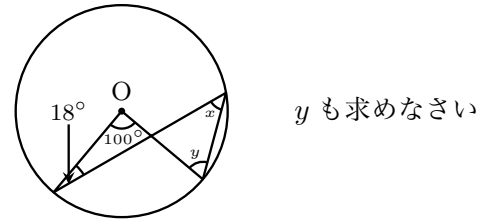
答え 135°

(6)



答え 37°

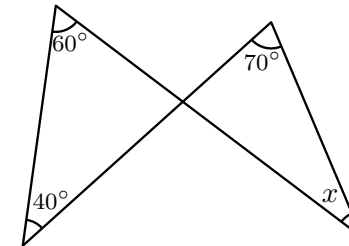
(7)



y も求めなさい

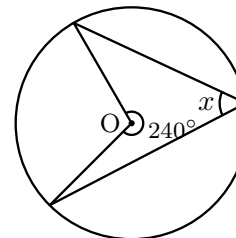
答え $50^\circ, 68^\circ$

(8)



答え 30°

(9)



答え 60°