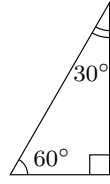
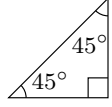
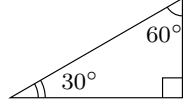


氏名 \_\_\_\_\_

(復習) 次の直角三角形を用いて,  $30^\circ$ ,  $45^\circ$ ,  $60^\circ$ ,  $120^\circ$ ,  $135^\circ$ ,  $150^\circ$  の  $\sin$ ,  $\cos$ ,  $\tan$  の値を求めなさい。



$\sin 30^\circ =$

$\cos 30^\circ =$

$\tan 30^\circ =$

$\sin 45^\circ =$

$\cos 45^\circ =$

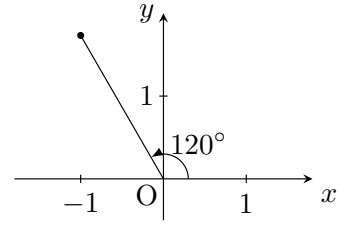
$\tan 45^\circ =$

$\sin 60^\circ =$

$\cos 60^\circ =$

$\tan 60^\circ =$

■  $120^\circ$  の三角比

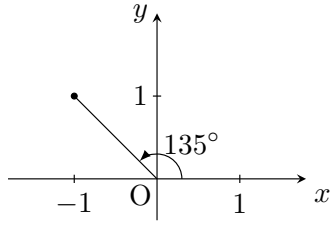


$\sin 120^\circ =$

$\cos 120^\circ =$

$\tan 120^\circ =$

■  $135^\circ$  の三角比

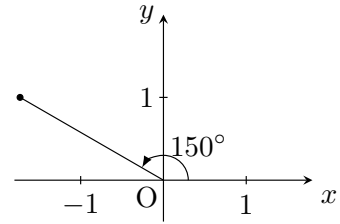


$\sin 120^\circ =$

$\cos 120^\circ =$

$\tan 120^\circ =$

■  $150^\circ$  の三角比



$\sin 120^\circ =$

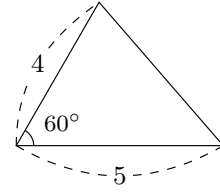
$\cos 120^\circ =$

$\tan 120^\circ =$

(三角形の面積) =  $\frac{1}{2} \times (\text{辺の長さ}) \times (\text{辺の長さ}) \times \sin(\text{間の角度})$

例題 右の三角形の面積を求めなさい。

解 面積 =  $\frac{1}{2} \times 4 \times 5 \times \sin 60^\circ$   
 $= \frac{1}{2} \times 4 \times 5 \times \frac{\sqrt{3}}{2}$   
 $= \frac{1}{1} \times 4 \times 5 \times \frac{\sqrt{3}}{2}$   
 $= 5\sqrt{3}$



1 次の三角形の面積を求めなさい。

