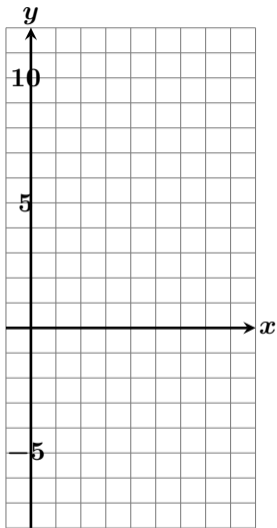
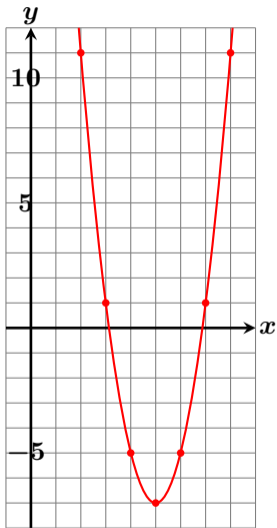


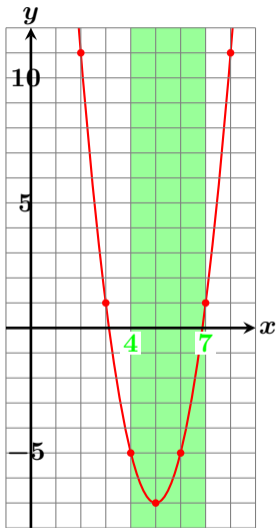
$y = 2(x - 5)^2 - 7$ ($4 \leq x \leq 7$) の最大値・最小値？



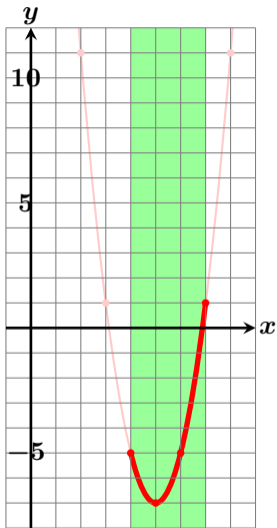
$y = 2(x - 5)^2 - 7$ ($4 \leq x \leq 7$) の最大値・最小値？



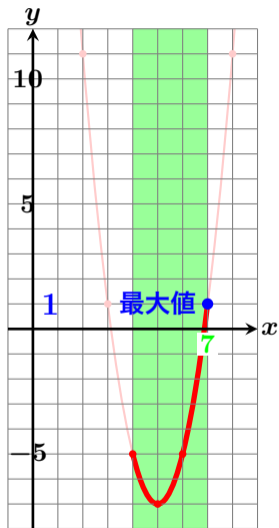
$y = 2(x - 5)^2 - 7$ ($4 \leq x \leq 7$) の最大値・最小値？



$y = 2(x - 5)^2 - 7$ ($4 \leq x \leq 7$) の最大値・最小値？

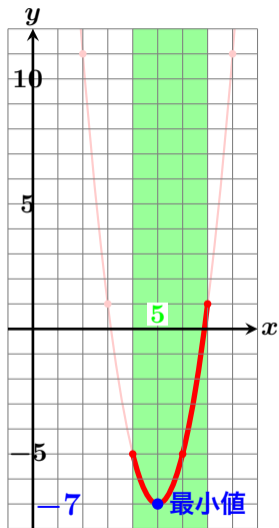


$y = 2(x - 5)^2 - 7$ ($4 \leq x \leq 7$) の最大値・最小値？



最大値 1 ($x = 7$ のとき)

$y = 2(x - 5)^2 - 7$ ($4 \leq x \leq 7$) の最大値・最小値？



最大値 1 ($x = 7$ のとき)

最小値 -7 ($x = 5$ のとき)