

数学 たし算・ひき算プリント # 12

年 組 号

3 左の時刻から何時間何分経つと右の時刻になりますか。

1 次の計算をしましょう。

$$\begin{array}{r} 1 \\ + 8 \\ \hline \end{array} \quad \begin{array}{r} 5 \\ + 7 \\ \hline \end{array} \quad \begin{array}{r} 6 \\ + 8 \\ \hline \end{array}$$

$$\begin{array}{r} 39 \\ + 18 \\ \hline \end{array} \quad \begin{array}{r} 63 \\ + 25 \\ \hline \end{array} \quad \begin{array}{r} 49 \\ + 34 \\ \hline \end{array}$$

$$\begin{array}{r} 9 \\ - 6 \\ \hline \end{array} \quad \begin{array}{r} 4 \\ - 2 \\ \hline \end{array} \quad \begin{array}{r} 5 \\ - 2 \\ \hline \end{array}$$

$$\begin{array}{r} 89 \\ - 43 \\ \hline \end{array} \quad \begin{array}{r} 37 \\ - 36 \\ \hline \end{array} \quad \begin{array}{r} 51 \\ - 20 \\ \hline \end{array}$$

2 次の計算をしましょう。

$$\begin{array}{r} 19 \\ + 34 \\ \hline \end{array} \quad \begin{array}{r} 54 \\ + 26 \\ \hline \end{array} \quad \begin{array}{r} 56 \\ + 39 \\ \hline \end{array}$$

$$\begin{array}{r} 27 \\ + 39 \\ \hline \end{array} \quad \begin{array}{r} 47 \\ + 23 \\ \hline \end{array} \quad \begin{array}{r} 65 \\ + 18 \\ \hline \end{array}$$

$$\begin{array}{r} 60 \\ - 38 \\ \hline \end{array} \quad \begin{array}{r} 75 \\ - 27 \\ \hline \end{array} \quad \begin{array}{r} 83 \\ - 29 \\ \hline \end{array}$$

$$\begin{array}{r} 97 \\ - 79 \\ \hline \end{array} \quad \begin{array}{r} 35 \\ - 17 \\ \hline \end{array} \quad \begin{array}{r} 65 \\ - 37 \\ \hline \end{array}$$

氏名

$$\begin{array}{r} 1 \\ + 2 \\ \hline \end{array} \quad \begin{array}{r} 1 \\ + 1 \\ \hline \end{array}$$

$$\begin{array}{r} 33 \\ + 18 \\ \hline \end{array} \quad \begin{array}{r} 12 \\ + 39 \\ \hline \end{array}$$

$$\begin{array}{r} 5 \\ - 4 \\ \hline \end{array} \quad \begin{array}{r} 9 \\ - 4 \\ \hline \end{array}$$

$$\begin{array}{r} 46 \\ - 34 \\ \hline \end{array} \quad \begin{array}{r} 98 \\ - 82 \\ \hline \end{array}$$


$$\begin{array}{r} 17 \\ + 46 \\ \hline \end{array} \quad \begin{array}{r} 28 \\ + 17 \\ \hline \end{array}$$

$$\begin{array}{r} 55 \\ + 26 \\ \hline \end{array} \quad \begin{array}{r} 25 \\ + 19 \\ \hline \end{array}$$

$$\begin{array}{r} 42 \\ - 28 \\ \hline \end{array} \quad \begin{array}{r} 67 \\ - 48 \\ \hline \end{array}$$


$$\begin{array}{r} 86 \\ - 38 \\ \hline \end{array} \quad \begin{array}{r} 81 \\ - 25 \\ \hline \end{array}$$

午前




→

午前




時間 分

午後




→

午後




時間 分

午前




→

午後




時間 分

午前




→

午前




時間 分

午前



→

午前



時間 分