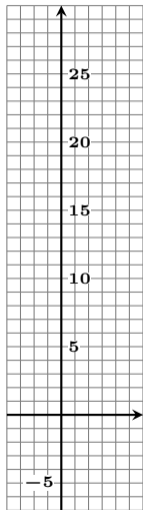
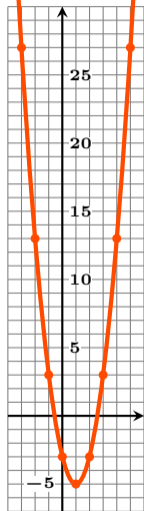


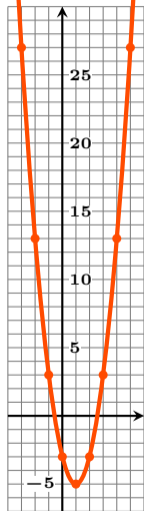
$y = 2(x - 1)^2 - 5$  の最大値・最小値？



$y = 2(x - 1)^2 - 5$  の最大値・最小値？

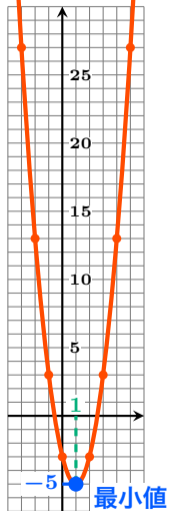


$y = 2(x - 1)^2 - 5$  の最大値・最小値？



最大値なし

$y = 2(x - 1)^2 - 5$  の最大値・最小値？



最大値なし

$x = 1$  のとき 最小値  $-5$