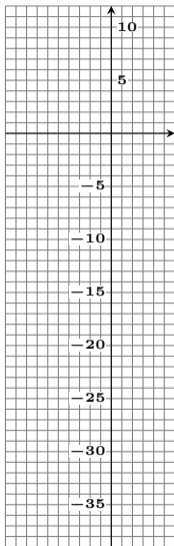
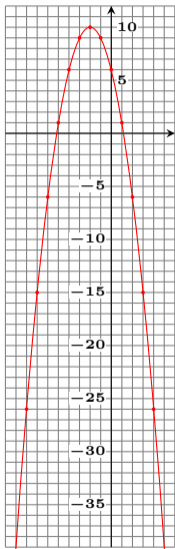


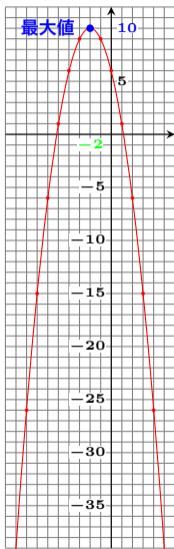
$y = -x^2 - 4x + 6$  の最大値・最小値？



$y = -x^2 - 4x + 6$  の最大値・最小値？

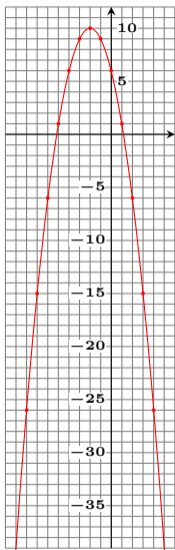


$y = -x^2 - 4x + 6$  の最大値・最小値？



最大値 **10** ( $x = -2$  のとき)

$y = -x^2 - 4x + 6$  の最大値・最小値？



最大値 **10** ( $x = -2$  のとき)

最小値なし